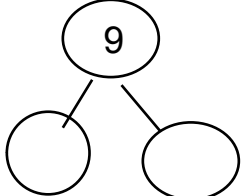
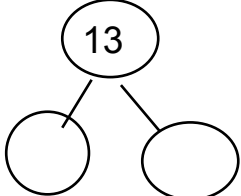


Directions: Group the numbers into tens and ones. Then add.

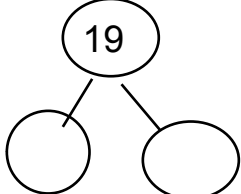
1. $9 + 6 = 15$



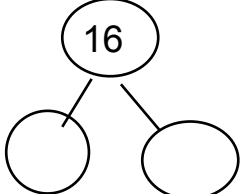
6. $13 + 2 = \underline{\hspace{2cm}}$



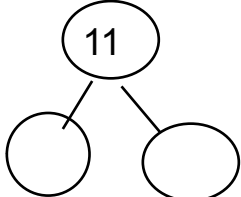
2. $19 + 6 = \underline{\hspace{2cm}}$



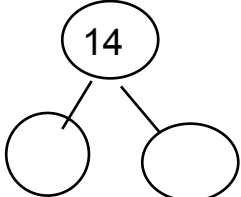
7. $16 + 5 = \underline{\hspace{2cm}}$



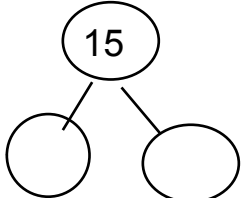
3. $11 + 7 = \underline{\hspace{2cm}}$



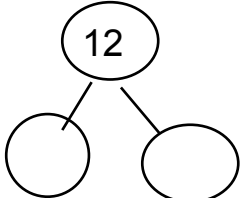
8. $14 + 8 = \underline{\hspace{2cm}}$



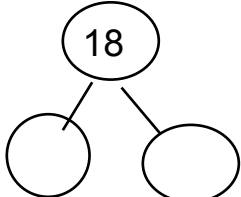
4. $15 + 9 = \underline{\hspace{2cm}}$



9. $12 + 3 = \underline{\hspace{2cm}}$



5. $18 + 3 = \underline{\hspace{2cm}}$



10. $10 + 4 = \underline{\hspace{2cm}}$

